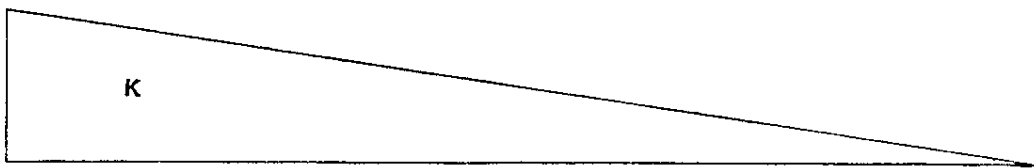
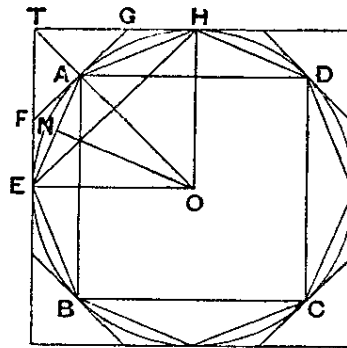


# MEASUREMENT OF A CIRCLE.

## Proposition 1.

*The area of any circle is equal to a right-angled triangle in which one of the sides about the right angle is equal to the radius, and the other to the circumference, of the circle.*

Let  $ABCD$  be the given circle,  $K$  the triangle described.



Then, if the circle is not equal to  $K$ , it must be either greater or less.

I. If possible, let the circle be greater than  $K$ .

Inscribe a square  $ABCD$ , bisect the arcs  $AB$ ,  $BC$ ,  $CD$ ,  $DA$ , then bisect (if necessary) the halves, and so on, until the sides of the inscribed polygon whose angular points are the points of division subtend segments whose sum is less than the excess of the area of the circle over  $K$ .

Thus the area of the polygon is greater than  $K$ .

Let  $AE$  be any side of it, and  $ON$  the perpendicular on  $AE$  from the centre  $O$ .

Then  $ON$  is less than the radius of the circle and therefore less than one of the sides about the right angle in  $K$ . Also the perimeter of the polygon is less than the circumference of the circle, i.e. less than the other side about the right angle in  $K$ .

Therefore the area of the polygon is less than  $K$ ; which is inconsistent with the hypothesis.

Thus the area of the circle is not greater than  $K$ .

II. If possible, let the circle be less than  $K$ .

Circumscribe a square, and let two adjacent sides, touching the circle in  $E, H$ , meet in  $T$ . Bisect the arcs between adjacent points of contact and draw the tangents at the points of bisection. Let  $A$  be the middle point of the arc  $EH$ , and  $FAG$  the tangent at  $A$ .

Then the angle  $TAG$  is a right angle.

Therefore  $TG > GA$   
 $> GH$ .

It follows that the triangle  $FTG$  is greater than half the area  $TEAH$ .

Similarly, if the arc  $AH$  be bisected and the tangent at the point of bisection be drawn, it will cut off from the area  $GAH$  more than one-half.

Thus, by continuing the process, we shall ultimately arrive at a circumscribed polygon such that the spaces intercepted between it and the circle are together less than the excess of  $K$  over the area of the circle.

Thus the area of the polygon will be less than  $K$ .

Now, since the perpendicular from  $O$  on any side of the polygon is equal to the radius of the circle, while the perimeter of the polygon is greater than the circumference of the circle, it follows that the area of the polygon is greater than the triangle  $K$ ; which is impossible.

Therefore the area of the circle is not less than  $K$ .

Since then the area of the circle is neither greater nor less than  $K$ , it is equal to it.

### Proposition 2.

*The area of a circle is to the square on its diameter as 11 to 14.*

[The text of this proposition is not satisfactory, and Archimedes cannot have placed it before Proposition 3, as the approximation depends upon the result of that proposition.]

### Proposition 3.

*The ratio of the circumference of any circle to its diameter is less than  $3\frac{1}{7}$  but greater than  $3\frac{10}{71}$ .*

[In view of the interesting questions arising out of the arithmetical content of this proposition of Archimedes, it is necessary, in reproducing it, to distinguish carefully the actual steps set out in the text as we have it from the intermediate steps (mostly supplied by Eutocius) which it is convenient to put in for the purpose of making the proof easier to follow. Accordingly all the steps not actually appearing in the text have been enclosed in square brackets, in order that it may be clearly seen how far Archimedes omits actual calculations and only gives results. It will be observed that he gives two fractional approximations to  $\sqrt{3}$  (one being less and the other greater than the real value) without any explanation as to how he arrived at them; and in like manner approximations to the square roots of several large numbers which are not complete squares are merely stated. These various approximations and the machinery of Greek arithmetic in general will be found discussed in the Introduction, Chapter IV.]

I. Let  $AB$  be the diameter of any circle,  $O$  its centre,  $AC$  the tangent at  $A$ ; and let the angle  $AOC$  be one-third of a right angle.

Then  $OA : AC [= \sqrt{3} : 1] > 265 : 153 \dots\dots\dots (1),$

and  $OC : CA [= 2 : 1] = 306 : 153 \dots\dots\dots (2).$

*First*, draw  $OD$  bisecting the angle  $AOC$  and meeting  $AC$  in  $D$ .

Now  $CO : OA = CD : DA,$  [Eucl. VI. 3]

so that  $[CO + OA : OA = CA : DA, \text{ or}]$

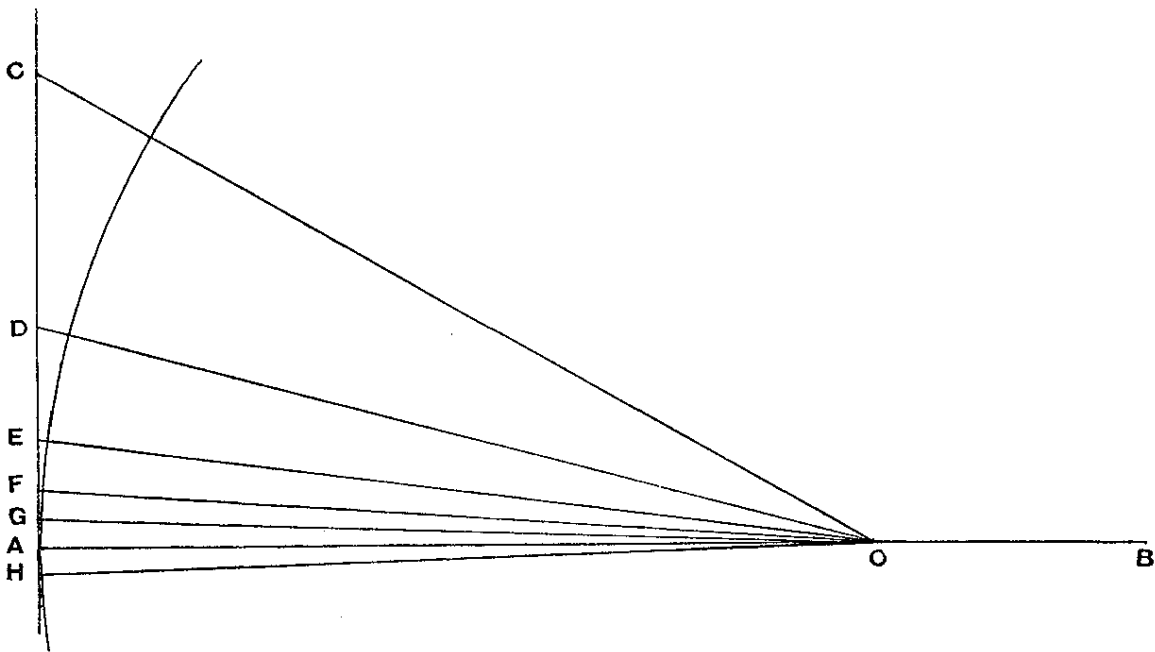
$$CO + OA : CA = OA : AD.$$

Therefore [by (1) and (2)]

$$OA : AD > 571 : 153 \dots\dots\dots (3).$$

Hence  $OD^2 : AD^2 [= (OA^2 + AD^2) : AD^2$   
 $> (571^2 + 153^2) : 153^2]$   
 $> 349450 : 23409,$

so that  $OD : DA > 591\frac{1}{8} : 153 \dots\dots\dots (4).$



*Secondly*, let  $OE$  bisect the angle  $AOD$ , meeting  $AD$  in  $E$ .

[Then  $DO : OA = DE : EA,$

so that  $DO + OA : DA = OA : AE.]$

Therefore  $OA : AE [ > (591\frac{1}{8} + 571) : 153, \text{ by (3) and (4) ]$   
 $> 1162\frac{1}{8} : 153 \dots\dots\dots (5).$

[It follows that

$$\begin{aligned} OE^2 : EA^2 &> \{(1162\frac{1}{8})^2 + 153^2\} : 153^2 \\ &> (1350534\frac{33}{64} + 23409) : 23409 \\ &> 1373943\frac{33}{64} : 23409.] \end{aligned}$$

Thus  $OE : EA > 1172\frac{1}{8} : 153 \dots \dots \dots (6).$

*Thirdly*, let  $OF$  bisect the angle  $AOE$  and meet  $AE$  in  $F$ .

We thus obtain the result [corresponding to (3) and (5) above] that

$$\begin{aligned} OA : AF &[> (1162\frac{1}{8} + 1172\frac{1}{8}) : 153] \\ &> 2334\frac{1}{4} : 153 \dots \dots \dots (7). \end{aligned}$$

[Therefore  $OF^2 : FA^2 > \{(2334\frac{1}{4})^2 + 153^2\} : 153^2$   
 $> 5472132\frac{1}{16} : 23409.]$

Thus  $OF : FA > 2339\frac{1}{4} : 153 \dots \dots \dots (8).$

*Fourthly*, let  $OG$  bisect the angle  $AOF$ , meeting  $AF$  in  $G$ .

We have then

$$\begin{aligned} OA : AG &[> (2334\frac{1}{4} + 2339\frac{1}{4}) : 153, \text{ by means of (7) and (8)}] \\ &> 4673\frac{1}{2} : 153. \end{aligned}$$

Now the angle  $AOC$ , which is one-third of a right angle, has been bisected four times, and it follows that

$$\angle AOG = \frac{1}{48} \text{ (a right angle).}$$

Make the angle  $AOH$  on the other side of  $OA$  equal to the angle  $AOG$ , and let  $GA$  produced meet  $OH$  in  $H$ .

Then  $\angle GOH = \frac{1}{24}$  (a right angle).

Thus  $GH$  is one side of a regular polygon of 96 sides circumscribed to the given circle.

And, since  $OA : AG > 4673\frac{1}{2} : 153,$

while  $AB = 2OA, \quad GH = 2AG,$

it follows that

$$\begin{aligned} AB : (\text{perimeter of polygon of 96 sides}) &[> 4673\frac{1}{2} : 153 \times 96] \\ &> 4673\frac{1}{2} : 14688. \end{aligned}$$

But 
$$\frac{14688}{4673\frac{1}{2}} = 3 + \frac{667\frac{1}{2}}{4673\frac{1}{2}}$$

$$\left[ < 3 + \frac{667\frac{1}{2}}{4672\frac{1}{2}} \right]$$

$$< 3\frac{1}{7}.$$

Therefore the circumference of the circle (being less than the perimeter of the polygon) is *a fortiori* less than  $3\frac{1}{7}$  times the diameter  $AB$ .

II. Next let  $AB$  be the diameter of a circle, and let  $AC$ , meeting the circle in  $C$ , make the angle  $CAB$  equal to one-third of a right angle. Join  $BC$ .

Then  $AC : CB [= \sqrt{3} : 1] < 1351 : 780$ .

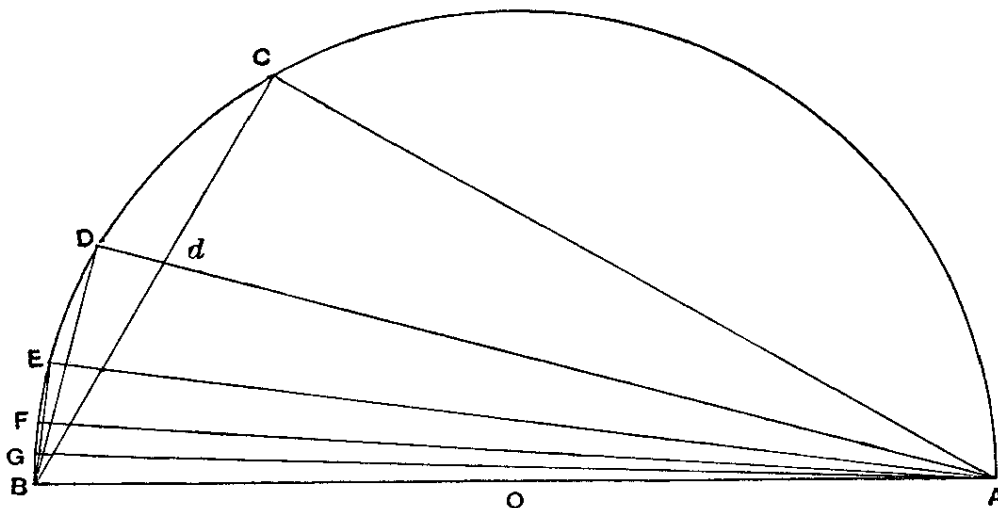
First, let  $AD$  bisect the angle  $BAC$  and meet  $BC$  in  $d$  and the circle in  $D$ . Join  $BD$ .

Then 
$$\angle BAD = \angle dAC$$

$$= \angle dBD,$$

and the angles at  $D, C$  are both right angles.

It follows that the triangles  $ADB, [ACd], BDd$  are similar.



Therefore 
$$AD : DB = BD : Dd$$

$$[= AC : Cd]$$

$$= AB : Bd \quad [\text{Eucl. VI. 3}]$$

$$= AB + AC : Bd + Cd$$

$$= AB + AC : BC$$

or 
$$BA + AC : BC = AD : DB.$$

[But  $AC : CB < 1351 : 780$ , from above,  
while  $BA : BC = 2 : 1$   
 $= 1560 : 780.$ ]

Therefore  $AD : DB < 2911 : 780 \dots \dots \dots (1).$

[Hence  $AB^2 : BD^2 < (2911^2 + 780^2) : 780^2$   
 $< 9082321 : 608400.$ ]

Thus  $AB : BD < 3013\frac{3}{4} : 780 \dots \dots \dots (2).$

*Secondly*, let  $AE$  bisect the angle  $BAD$ , meeting the circle in  $E$ ; and let  $BE$  be joined.

Then we prove, in the same way as before, that

$$AE : EB [= BA + AD : BD$$

$$< (3013\frac{3}{4} + 2911) : 780, \text{ by (1) and (2)}]$$

$$< 5924\frac{3}{4} : 780$$

$$< 5924\frac{3}{4} \times \frac{4}{13} : 780 \times \frac{4}{13}$$

$$< 1823 : 240 \dots \dots \dots (3).$$

[Hence  $AB^2 : BE^2 < (1823^2 + 240^2) : 240^2$   
 $< 3380929 : 57600.$ ]

Therefore  $AB : BE < 1838\frac{9}{11} : 240 \dots \dots \dots (4).$

*Thirdly*, let  $AF$  bisect the angle  $BAE$ , meeting the circle in  $F$ .

Thus  $AF : FB [= BA + AE : BE$

$$< 3661\frac{9}{11} : 240, \text{ by (3) and (4)}]$$

$$< 3661\frac{9}{11} \times \frac{11}{40} : 240 \times \frac{11}{40}$$

$$< 1007 : 66 \dots \dots \dots (5).$$

[It follows that

$$AB^2 : BF^2 < (1007^2 + 66^2) : 66^2$$

$$< 1018405 : 4356.]$$

Therefore  $AB : BF < 1009\frac{1}{6} : 66 \dots \dots \dots (6).$

*Fourthly*, let the angle  $BAF$  be bisected by  $AG$  meeting the circle in  $G$ .

Then  $AG : GB [= BA + AF : BF]$

$$< 2016\frac{1}{6} : 66, \text{ by (5) and (6).}$$

# END OF SAMPLE TEXT



The Complete Text can be found on our CD:  
**Primary Literary Sources For Ancient Literature**  
which can be purchased on our Website :  
[www.Brainfly.net](http://www.Brainfly.net)

or

by sending **\$64.95** in check or money order to :  
**Brainfly Inc.**  
**5100 Garfield Ave. #46**  
**Sacramento CA 95841-3839**

## **TEACHER'S DISCOUNT:**

If you are a **TEACHER** you can take advantage of our teacher's discount. Click on **Teachers Discount** on our website ([www.Brainfly.net](http://www.Brainfly.net)) or **Send us \$55.95** and we will send you a full copy of *Primary Literary Sources For Ancient Literature* **AND** our *5000 Classics CD (a collection of over 5000 classic works of literature in electronic format (.txt))* plus our *Wholesale price list*.

If you have any suggestions such as books you would like to see added to the collection or if you would like our wholesale prices list please send us an email to:

[webcomments@brainfly.net](mailto:webcomments@brainfly.net)